



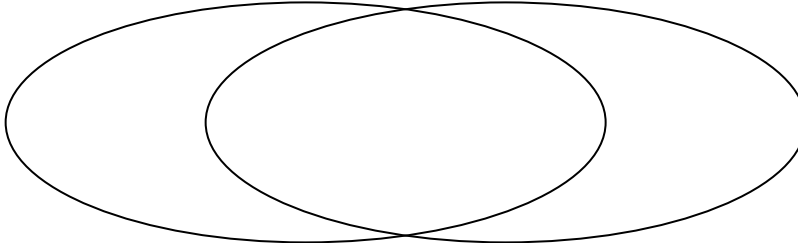
Solve each problem.

- 1) The table below shows the physical traits of several pets in a pet shelter. Use the chart to fill in the Venn Diagram.

	Coco	Bubbles	Sparkles	Emily	Fluffy	Lucky
Fur Color	Gray	Brown	Gray	Brown	Gray	Gray
Breed	Mixed	Pure	Mixed	Pure	Pure	Mixed

**Gray Fur**

**Pure Breed**

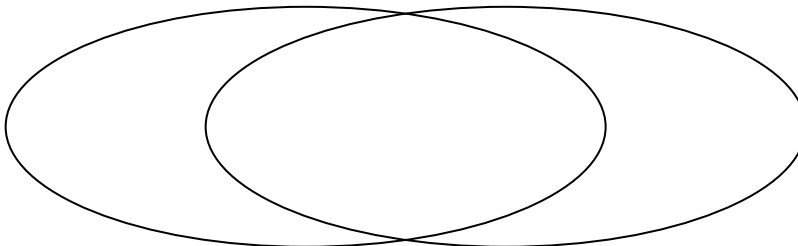


- 2) The table below shows the description of several video games. Use the chart to fill in the Venn Diagram.

	DreamRush	Everplan	Airblaze	Farplan	Warstar	Crystal Rain
Type	Action	RPG	RPG	RPG	Action	RPG
Difficulty	Easy	Hard	Easy	Easy	Easy	Hard

**RPG**

**Easy**

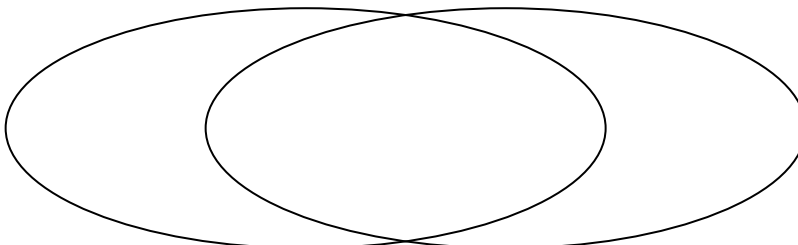


- 3) The table below shows the description of several super heroes. Use the chart to fill in the Venn Diagram.

	Protector	Sunspot	Karma	Citadel	Nightwave	Blitz Fire
Wears Mask	Yes	Yes	Yes	No	Yes	Yes
Power	Super Strength	Super Strength	Flight	Flight	Flight	Super Strength

**Wears Mask**

**Can Fly**





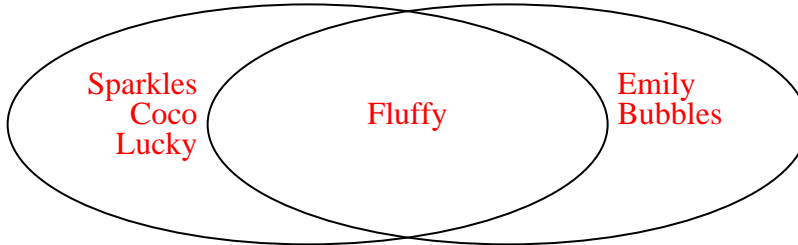
Solve each problem.

- 1) The table below shows the physical traits of several pets in a pet shelter. Use the chart to fill in the Venn Diagram.

	Coco	Bubbles	Sparkles	Emily	Fluffy	Lucky
Fur Color	Gray	Brown	Gray	Brown	Gray	Gray
Breed	Mixed	Pure	Mixed	Pure	Pure	Mixed

Gray Fur

Pure Breed

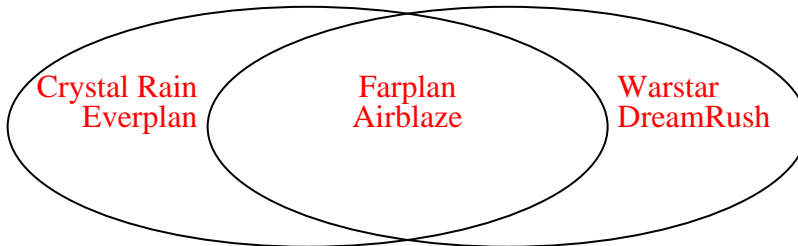


- 2) The table below shows the description of several video games. Use the chart to fill in the Venn Diagram.

	DreamRush	Everplan	Airblaze	Farplan	Warstar	Crystal Rain
Type	Action	RPG	RPG	RPG	Action	RPG
Difficulty	Easy	Hard	Easy	Easy	Easy	Hard

RPG

Easy

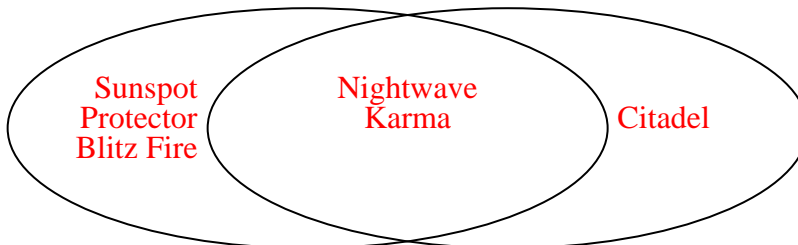


- 3) The table below shows the description of several super heroes. Use the chart to fill in the Venn Diagram.

	Protector	Sunspot	Karma	Citadel	Nightwave	Blitz Fire
Wears Mask	Yes	Yes	Yes	No	Yes	Yes
Power	Super Strength	Super Strength	Flight	Flight	Flight	Super Strength

Wears Mask

Can Fly





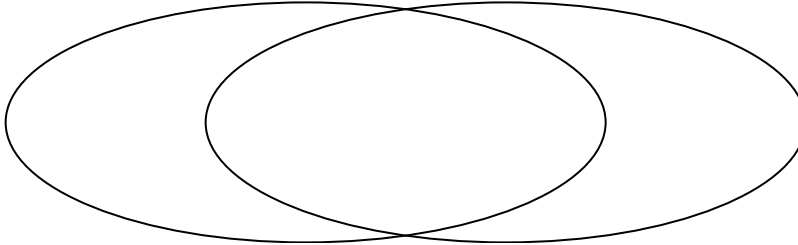
Solve each problem.

1) The table below shows the physical traits of several pets in a pet shelter. Use the chart to fill in the Venn Diagram.

	Coco	Fluffy	Sparkles	Bubbles	Alfus	Emily
Type	Cat	Dog	Cat	Dog	Cat	Dog
Fur Length	Short	Short	Short	Long	Short	Long

**Dog**

**Short Hair**

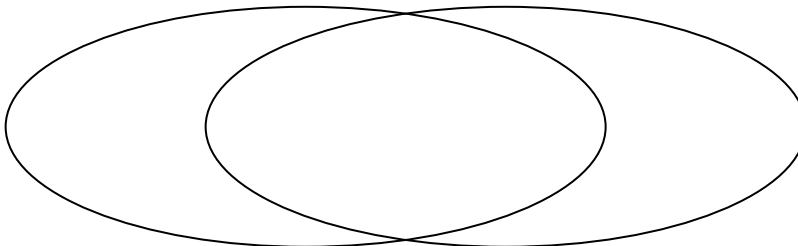


2) The table below shows the attributes of several types of candy. Use the chart to fill in the Venn Diagram.

	Ribbles	Dubbles	Googlies	Fidgies	Yum-Yums	Bananza
Flavor	Sugar	Sugar	Chocolate	Chocolate	Sugar	Sugar
Package	Bag	Box	Box	Box	Bag	Box

**Sugar**

**Box Package**

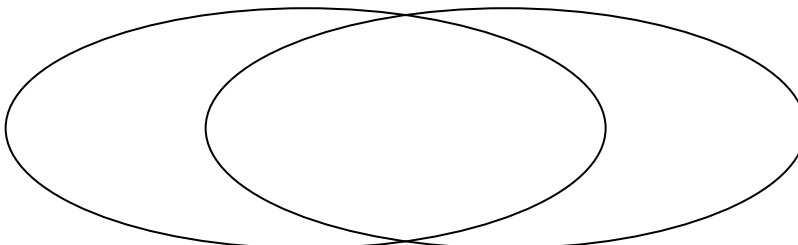


3) The table below shows the physical traits of different students. Use the chart to fill in the Venn Diagram.

	Ben	Dan	Zoe	Helen	Emma	Lisa
Hair Color	Blonde	Red	Red	Red	Blonde	Blonde
Dominant Hand	Left	Left	Left	Left	Right	Right

**Blonde Hair**

**Left Handed**





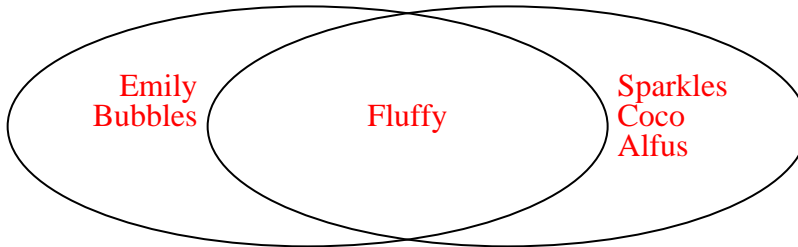
Solve each problem.

- 1) The table below shows the physical traits of several pets in a pet shelter. Use the chart to fill in the Venn Diagram.

	Coco	Fluffy	Sparkles	Bubbles	Alfus	Emily
Type	Cat	Dog	Cat	Dog	Cat	Dog
Fur Length	Short	Short	Short	Long	Short	Long

**Dog**

**Short Hair**

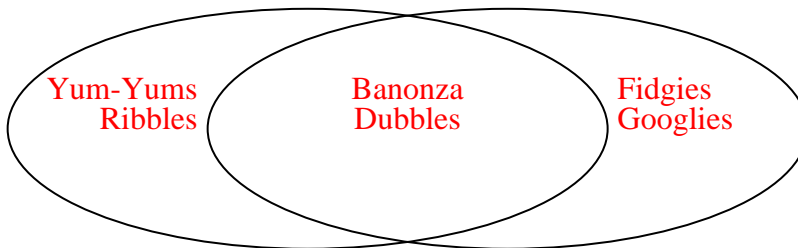


- 2) The table below shows the attributes of several types of candy. Use the chart to fill in the Venn Diagram.

	Ribbles	Dubbles	Googlies	Fidgies	Yum-Yums	Bananza
Flavor	Sugar	Sugar	Chocolate	Chocolate	Sugar	Sugar
Package	Bag	Box	Box	Box	Bag	Box

**Sugar**

**Box Package**

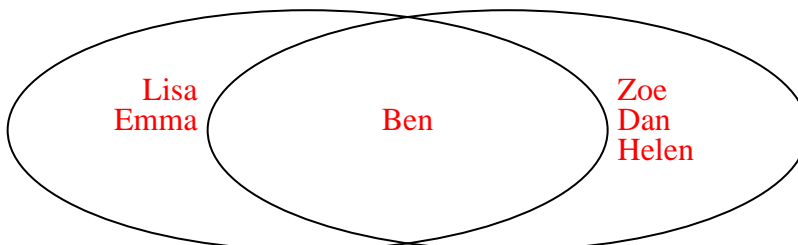


- 3) The table below shows the physical traits of different students. Use the chart to fill in the Venn Diagram.

	Ben	Dan	Zoe	Helen	Emma	Lisa
Hair Color	Blonde	Red	Red	Red	Blonde	Blonde
Dominant Hand	Left	Left	Left	Left	Right	Right

**Blonde Hair**

**Left Handed**





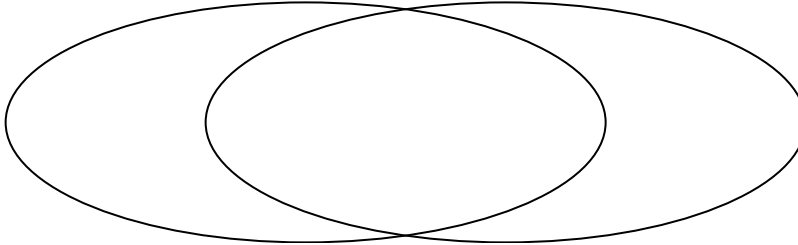
Solve each problem.

1) The table below shows the attributes of several types of candy. Use the chart to fill in the Venn Diagram.

	Bananza	Googlies	Dubbles	Yum-Yums	Fidgies	Ribbles
Type	Hard	Hard	Hard	Hard	Soft	Soft
Color	Mixed	Uniform	Uniform	Mixed	Mixed	Mixed

**Hard Candy**

**Mixed Color**

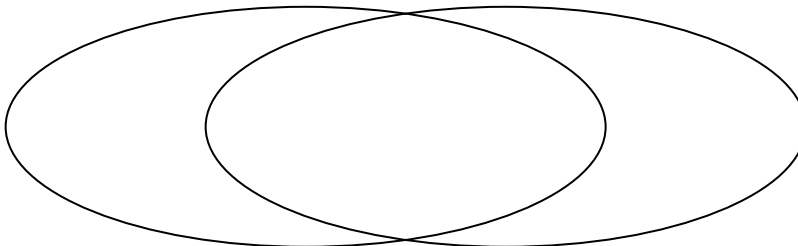


2) The table below shows the description of several super heroes. Use the chart to fill in the Venn Diagram.

	Moon Shadow	Karma	Blitz Fire	Nightwave	Sunspot	Protector
Has Sidekick	Yes	Yes	Yes	No	No	Yes
Wears Mask	No	No	No	Yes	Yes	Yes

**Has Sidekick**

**Wears Mask**

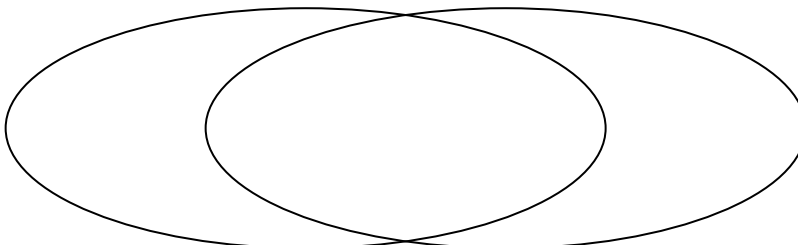


3) The table below shows the description of several video games. Use the chart to fill in the Venn Diagram.

	Farplan	DreamRush	Everplan	Airblaze	Crystal Rain	Warstar
Difficulty	Easy	Hard	Hard	Easy	Easy	Easy
Type	RPG	RPG	RPG	RPG	RPG	Action

**Easy**

**RPG**

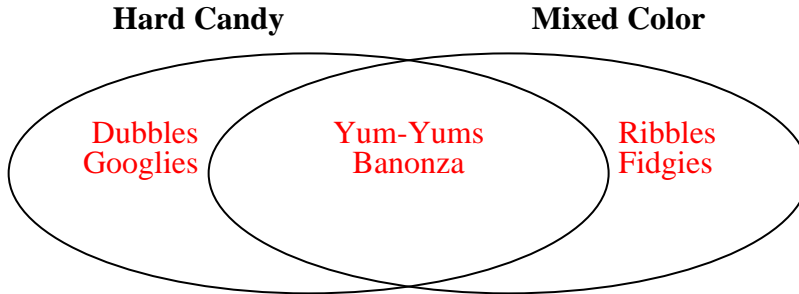




Solve each problem.

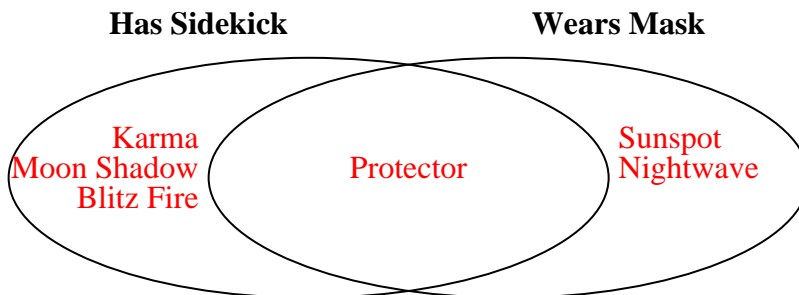
1) The table below shows the attributes of several types of candy. Use the chart to fill in the Venn Diagram.

	Banonza	Googlies	Dubbles	Yum-Yums	Fidgies	Ribbles
Type	Hard	Hard	Hard	Hard	Soft	Soft
Color	Mixed	Uniform	Uniform	Mixed	Mixed	Mixed



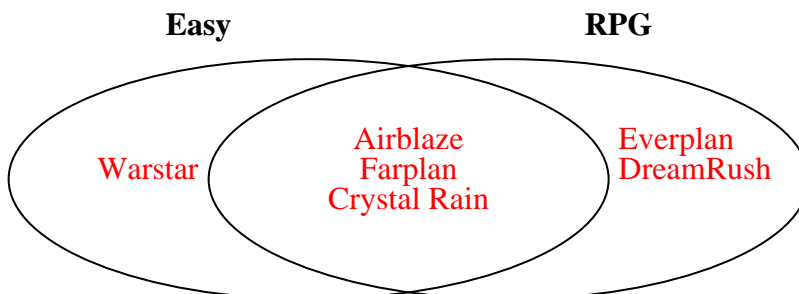
2) The table below shows the description of several super heroes. Use the chart to fill in the Venn Diagram.

	Moon Shadow	Karma	Blitz Fire	Nightwave	Sunspot	Protector
Has Sidekick	Yes	Yes	Yes	No	No	Yes
Wears Mask	No	No	No	Yes	Yes	Yes



3) The table below shows the description of several video games. Use the chart to fill in the Venn Diagram.

	Farplan	DreamRush	Everplan	Airblaze	Crystal Rain	Warstar
Difficulty	Easy	Hard	Hard	Easy	Easy	Easy
Type	RPG	RPG	RPG	RPG	RPG	Action





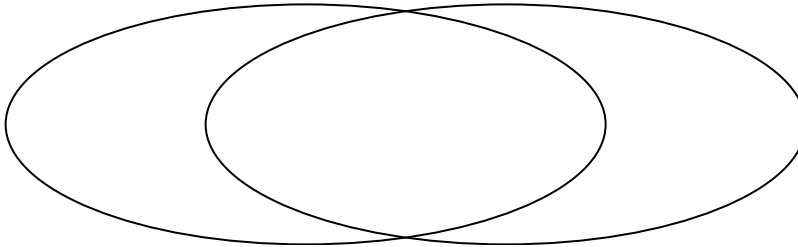
Solve each problem.

1) The table below shows the physical traits of different students. Use the chart to fill in the Venn Diagram.

	Carl	Kim	Faye	Mark	Rey	Dan
Dominant Hand	Right	Left	Left	Right	Left	Left
Hair Color	Blonde	Blonde	Blonde	Blonde	Red	Red

Left Handed

Blonde Hair

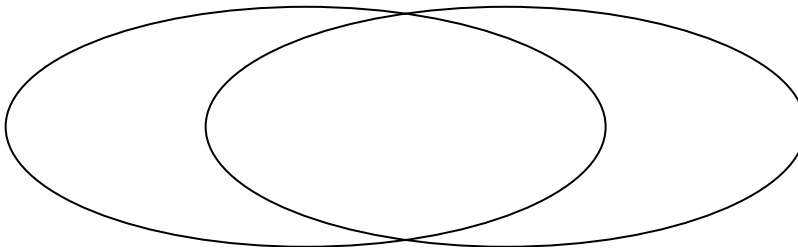


2) The table below shows the physical traits of several pets in a pet shelter. Use the chart to fill in the Venn Diagram.

	Emily	Bubbles	Alfus	Fluffy	Lucky	Coco
Breed	Mixed	Pure	Mixed	Pure	Pure	Pure
Fur Length	Short	Long	Short	Short	Short	Short

Pure Breed

Short Hair

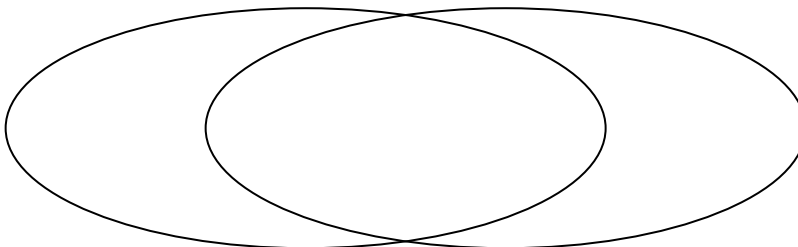


3) The table below shows the description of several video games. Use the chart to fill in the Venn Diagram.

	DreamRush	Farplan	Warstar	Crystal Rain	Airblaze	Everplan
Type	Action	RPG	RPG	RPG	Action	RPG
Difficulty	Easy	Hard	Easy	Hard	Easy	Easy

RPG

Easy





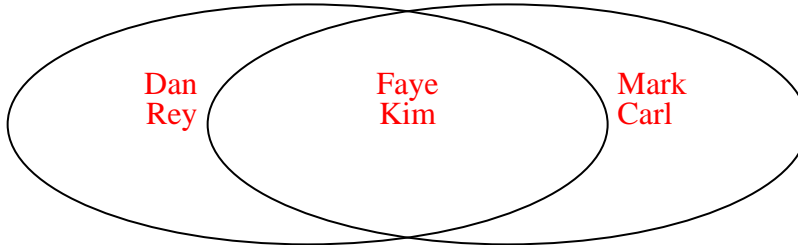
Solve each problem.

1) The table below shows the physical traits of different students. Use the chart to fill in the Venn Diagram.

	Carl	Kim	Faye	Mark	Rey	Dan
Dominant Hand	Right	Left	Left	Right	Left	Left
Hair Color	Blonde	Blonde	Blonde	Blonde	Red	Red

Left Handed

Blonde Hair

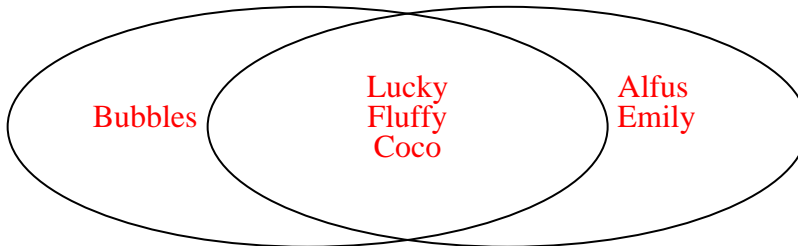


2) The table below shows the physical traits of several pets in a pet shelter. Use the chart to fill in the Venn Diagram.

	Emily	Bubbles	Alfus	Fluffy	Lucky	Coco
Breed	Mixed	Pure	Mixed	Pure	Pure	Pure
Fur Length	Short	Long	Short	Short	Short	Short

Pure Breed

Short Hair

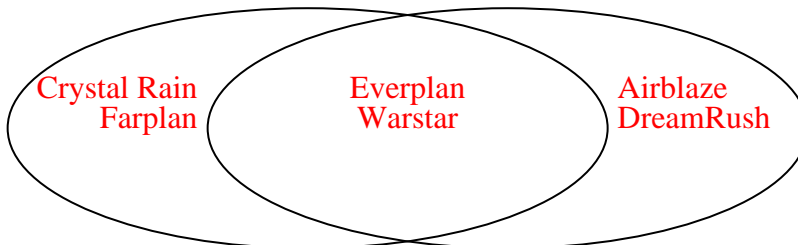


3) The table below shows the description of several video games. Use the chart to fill in the Venn Diagram.

	DreamRush	Farplan	Warstar	Crystal Rain	Airblaze	Everplan
Type	Action	RPG	RPG	RPG	Action	RPG
Difficulty	Easy	Hard	Easy	Hard	Easy	Easy

RPG

Easy







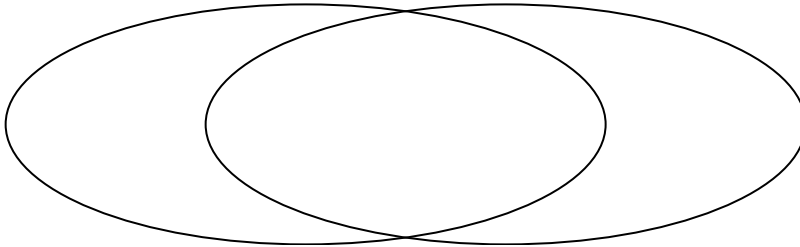
Solve each problem.

1) The table below shows the information on several pizza places. Use the chart to fill in the Venn Diagram.

	John's Pizza	Luigi's Pizza	Pizza Bros	Slice of Life	Oven Baked	Za Pizza
Price	Expensive	Cheap	Expensive	Expensive	Expensive	Expensive
Type	Chain	Chain	Family Owned	Chain	Family Owned	Chain

**Expensive**

**Chain Store**

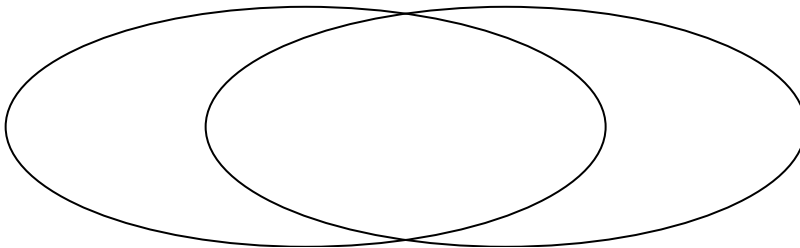


2) The table below shows the physical traits of several pets in a pet shelter. Use the chart to fill in the Venn Diagram.

	Coco	Sparkles	Alfus	Lucky	Emily	Fluffy
Fur Length	Short	Short	Short	Long	Long	Short
Type	Cat	Dog	Cat	Dog	Dog	Dog

**Short Hair**

**Dog**

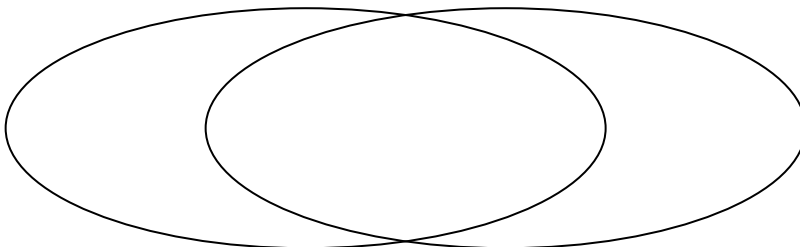


3) The table below shows the description of several video games. Use the chart to fill in the Venn Diagram.

	Warstar	Everplan	Airblaze	Farplan	DreamRush	Crystal Rain
Difficulty	Hard	Easy	Easy	Hard	Easy	Hard
Length	Short	Short	Long	Short	Long	Short

**Easy**

**Short Length**

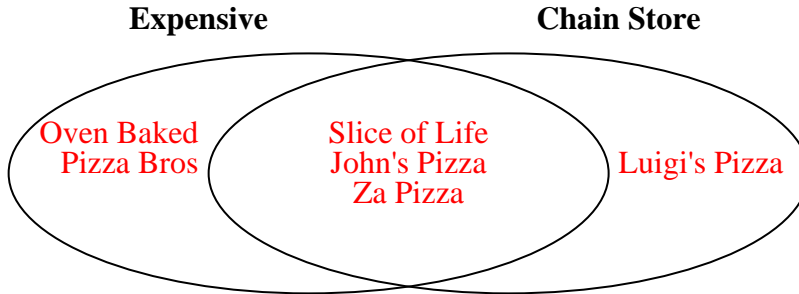




Solve each problem.

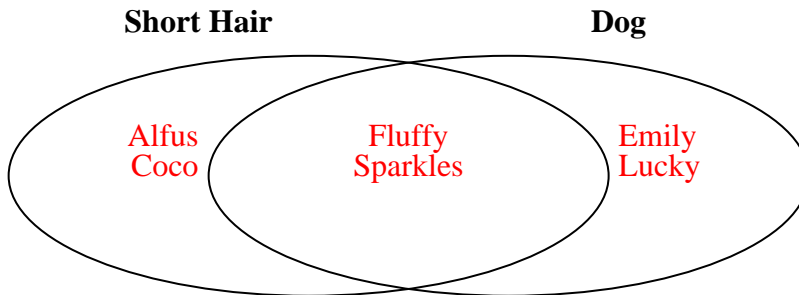
1) The table below shows the information on several pizza places. Use the chart to fill in the Venn Diagram.

	John's Pizza	Luigi's Pizza	Pizza Bros	Slice of Life	Oven Baked	Za Pizza
Price	Expensive	Cheap	Expensive	Expensive	Expensive	Expensive
Type	Chain	Chain	Family Owned	Chain	Family Owned	Chain



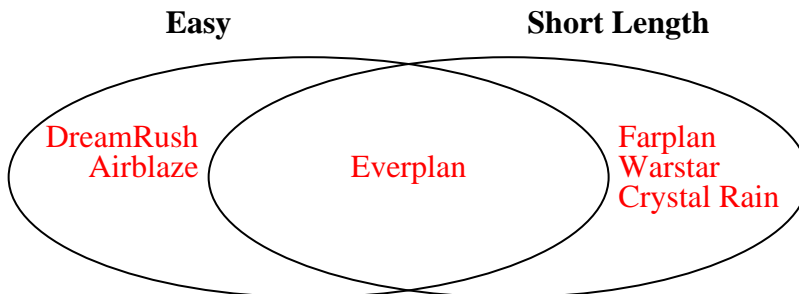
2) The table below shows the physical traits of several pets in a pet shelter. Use the chart to fill in the Venn Diagram.

	Coco	Sparkles	Alfus	Lucky	Emily	Fluffy
Fur Length	Short	Short	Short	Long	Long	Short
Type	Cat	Dog	Cat	Dog	Dog	Dog



3) The table below shows the description of several video games. Use the chart to fill in the Venn Diagram.

	Warstar	Everplan	Airblaze	Farplan	DreamRush	Crystal Rain
Difficulty	Hard	Easy	Easy	Hard	Easy	Hard
Length	Short	Short	Long	Short	Long	Short





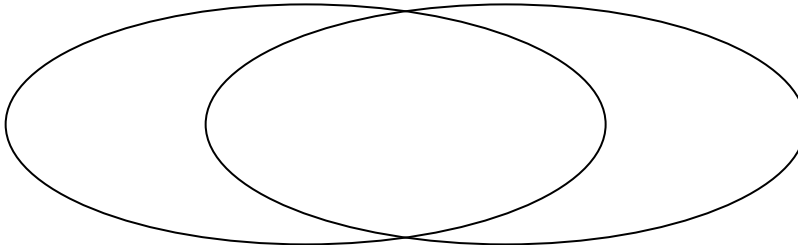
Solve each problem.

- 1) The table below shows the physical traits of several pets in a pet shelter. Use the chart to fill in the Venn Diagram.

	Alfus	Fluffy	Coco	Emily	Bubbles	Sparkles
Fur Color	Brown	Brown	Brown	Gray	Gray	Gray
Breed	Pure	Pure	Pure	Mixed	Mixed	Pure

**Gray Fur**

**Pure Breed**

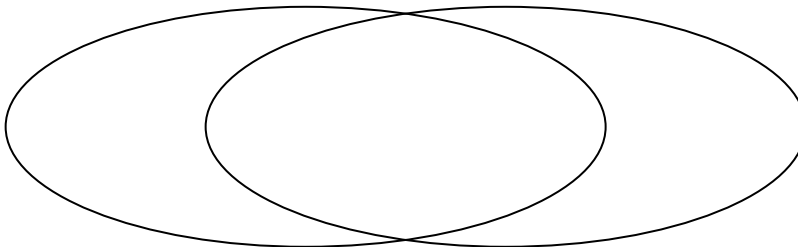


- 2) The table below shows the physical traits of different students. Use the chart to fill in the Venn Diagram.

	Pam	Jane	Sam	Kim	Faye	Ben
Pet	Cat	Cat	Dog	Cat	Dog	Cat
Eye Color	Green	Blue	Blue	Blue	Blue	Blue

**Cat**

**Blue Eyes**

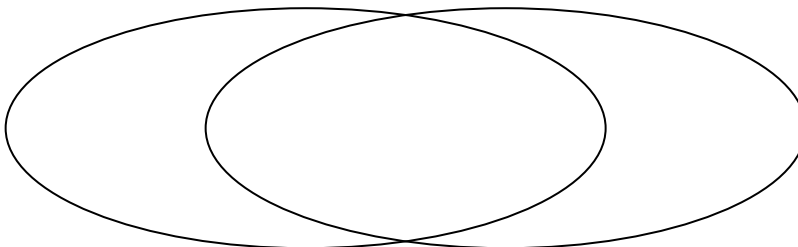


- 3) The table below shows the attributes of several types of candy. Use the chart to fill in the Venn Diagram.

	Yum-Yums	Fidgies	Dubbles	Bananza	Ribbles	Googlies
Color	Mixed	Mixed	Uniform	Mixed	Mixed	Uniform
Package	Bag	Box	Box	Bag	Box	Box

**Mixed Color**

**Box Package**





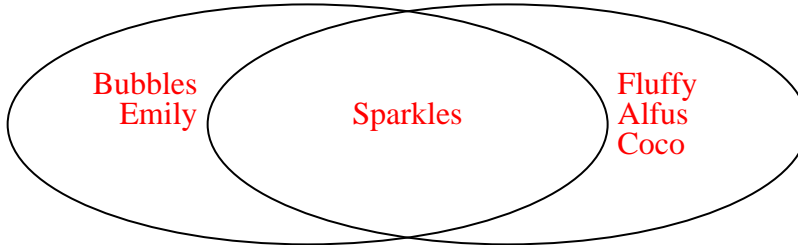
Solve each problem.

- 1) The table below shows the physical traits of several pets in a pet shelter. Use the chart to fill in the Venn Diagram.

	Alfus	Fluffy	Coco	Emily	Bubbles	Sparkles
Fur Color	Brown	Brown	Brown	Gray	Gray	Gray
Breed	Pure	Pure	Pure	Mixed	Mixed	Pure

**Gray Fur**

**Pure Breed**

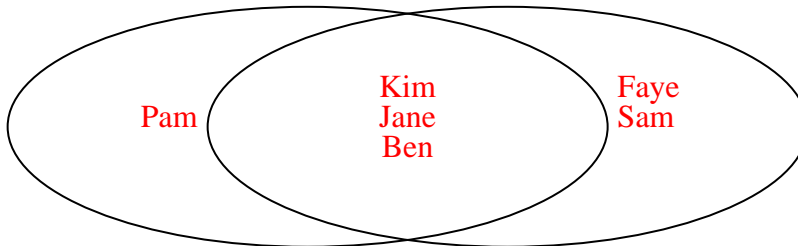


- 2) The table below shows the physical traits of different students. Use the chart to fill in the Venn Diagram.

	Pam	Jane	Sam	Kim	Faye	Ben
Pet	Cat	Cat	Dog	Cat	Dog	Cat
Eye Color	Green	Blue	Blue	Blue	Blue	Blue

**Cat**

**Blue Eyes**

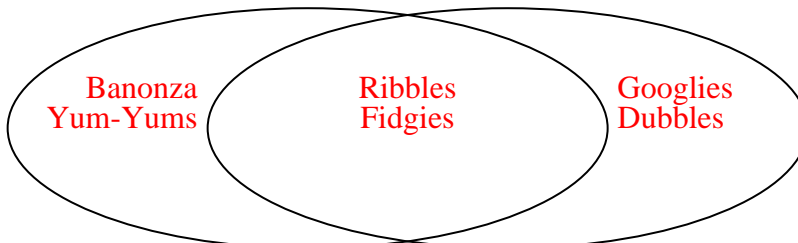


- 3) The table below shows the attributes of several types of candy. Use the chart to fill in the Venn Diagram.

	Yum-Yums	Fidgies	Dubbles	Bananza	Ribbles	Googlies
Color	Mixed	Mixed	Uniform	Mixed	Mixed	Uniform
Package	Bag	Box	Box	Bag	Box	Box

**Mixed Color**

**Box Package**





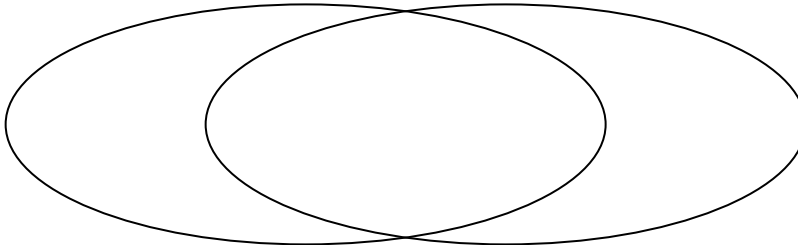
Solve each problem.

- 1) The table below shows the description of several video games. Use the chart to fill in the Venn Diagram.

	Airblaze	DreamRush	Farplan	Everplan	Crystal Rain	Warstar
Difficulty	Easy	Easy	Easy	Hard	Easy	Hard
Art Style	Fantasy	Realistic	Realistic	Realistic	Realistic	Realistic

Easy

Realistic Art

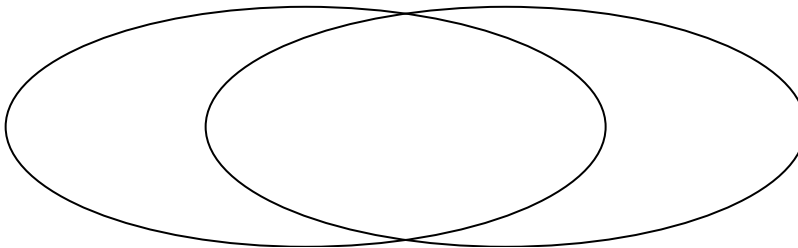


- 2) The table below shows the physical traits of different students. Use the chart to fill in the Venn Diagram.

	Vicky	Jane	Tom	Ned	Dan	Kim
Eye Color	Green	Blue	Blue	Blue	Green	Blue
Dominant Hand	Left	Right	Right	Left	Left	Right

Blue Eyes

Left Handed

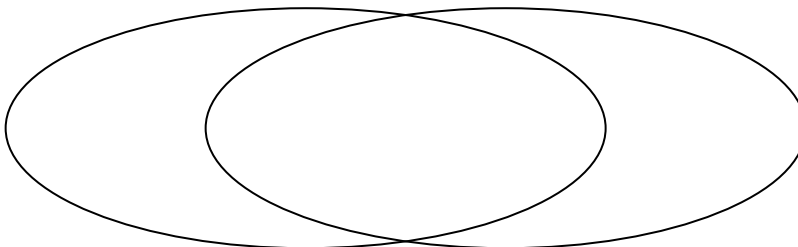


- 3) The table below shows the physical traits of several pets in a pet shelter. Use the chart to fill in the Venn Diagram.

	Coco	Fluffy	Emily	Sparkles	Lucky	Alfus
Type	Dog	Cat	Dog	Dog	Dog	Dog
Fur Color	Gray	Gray	Brown	Gray	Brown	Brown

Dog

Gray Fur





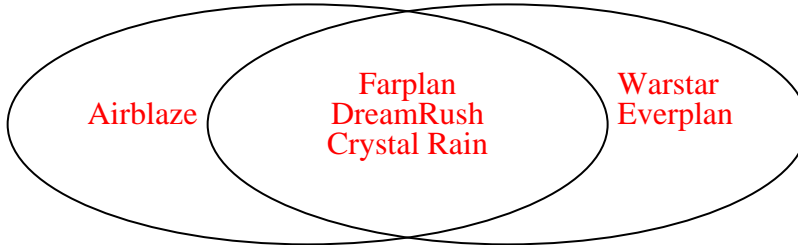
Solve each problem.

- 1) The table below shows the description of several video games. Use the chart to fill in the Venn Diagram.

	Airblaze	DreamRush	Farplan	Everplan	Crystal Rain	Warstar
Difficulty	Easy	Easy	Easy	Hard	Easy	Hard
Art Style	Fantasy	Realistic	Realistic	Realistic	Realistic	Realistic

Easy

Realistic Art

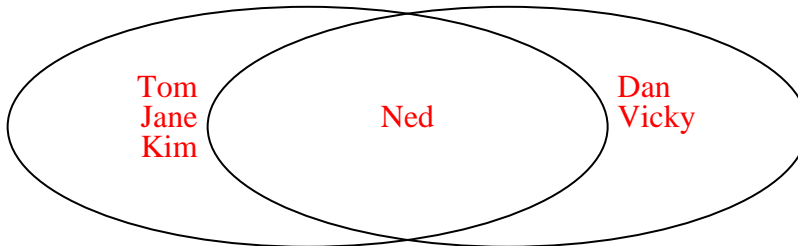


- 2) The table below shows the physical traits of different students. Use the chart to fill in the Venn Diagram.

	Vicky	Jane	Tom	Ned	Dan	Kim
Eye Color	Green	Blue	Blue	Blue	Green	Blue
Dominant Hand	Left	Right	Right	Left	Left	Right

Blue Eyes

Left Handed

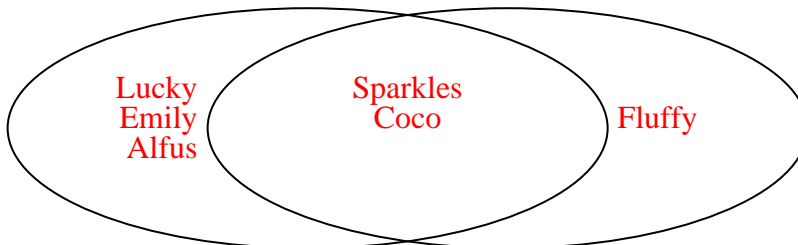


- 3) The table below shows the physical traits of several pets in a pet shelter. Use the chart to fill in the Venn Diagram.

	Coco	Fluffy	Emily	Sparkles	Lucky	Alfus
Type	Dog	Cat	Dog	Dog	Dog	Dog
Fur Color	Gray	Gray	Brown	Gray	Brown	Brown

Dog

Gray Fur





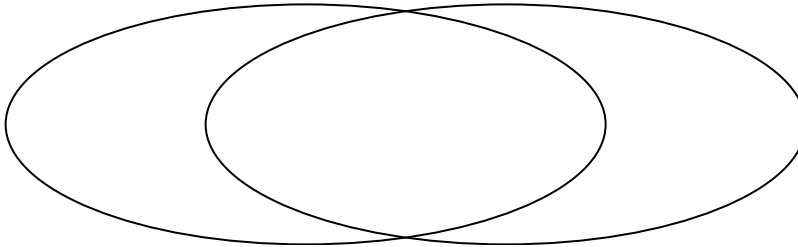
Solve each problem.

1) The table below shows the physical traits of different students. Use the chart to fill in the Venn Diagram.

	Ned	Rey	Dan	Vicky	Zoe	Helen
Dominant Hand	Left	Right	Left	Left	Right	Left
Hair Color	Red	Blonde	Blonde	Blonde	Blonde	Red

Left Handed

Blonde Hair

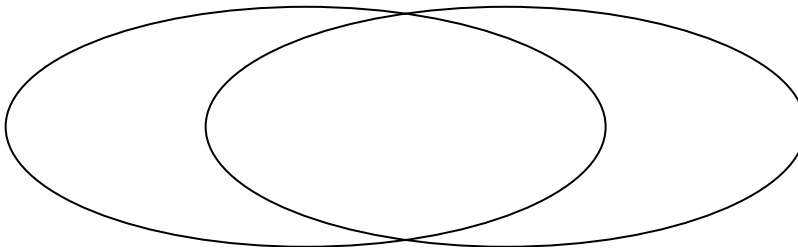


2) The table below shows the information on several pizza places. Use the chart to fill in the Venn Diagram.

	Pizza Bros	Luigi's Pizza	John's Pizza	Italy's Best	Za Pizza	Slice of Life
Quality	High	Low	High	High	High	High
Type	Chain	Chain	Chain	Family Owned	Family Owned	Chain

High Quality

Chain Store

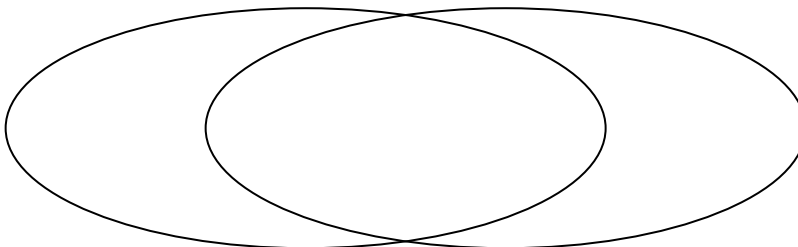


3) The table below shows the description of several video games. Use the chart to fill in the Venn Diagram.

	Crystal Rain	Airblaze	DreamRush	Farplan	Warstar	Everplan
Art Style	Realistic	Realistic	Fantasy	Realistic	Realistic	Fantasy
Length	Short	Short	Short	Long	Short	Short

Realistic Art

Short Length





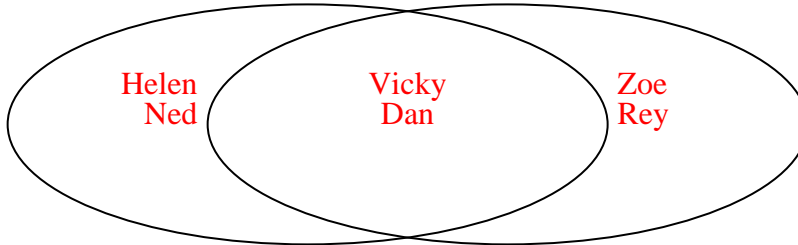
Solve each problem.

1) The table below shows the physical traits of different students. Use the chart to fill in the Venn Diagram.

	Ned	Rey	Dan	Vicky	Zoe	Helen
Dominant Hand	Left	Right	Left	Left	Right	Left
Hair Color	Red	Blonde	Blonde	Blonde	Blonde	Red

Left Handed

Blonde Hair




2) The table below shows the information on several pizza places. Use the chart to fill in the Venn Diagram.

	Pizza Bros	Luigi's Pizza	John's Pizza	Italy's Best	Za Pizza	Slice of Life
Quality	High	Low	High	High	High	High
Type	Chain	Chain	Chain	Family Owned	Family Owned	Chain

High Quality

Chain Store

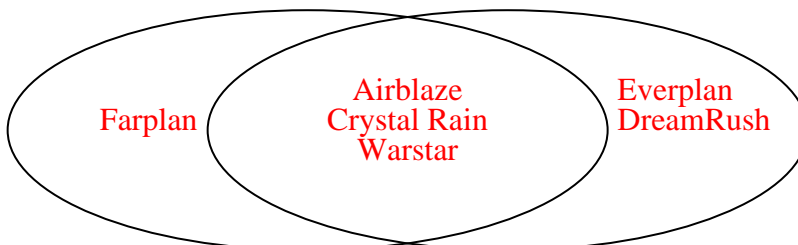


3) The table below shows the description of several video games. Use the chart to fill in the Venn Diagram.

	Crystal Rain	Airblaze	DreamRush	Farplan	Warstar	Everplan
Art Style	Realistic	Realistic	Fantasy	Realistic	Realistic	Fantasy
Length	Short	Short	Short	Long	Short	Short

Realistic Art

Short Length







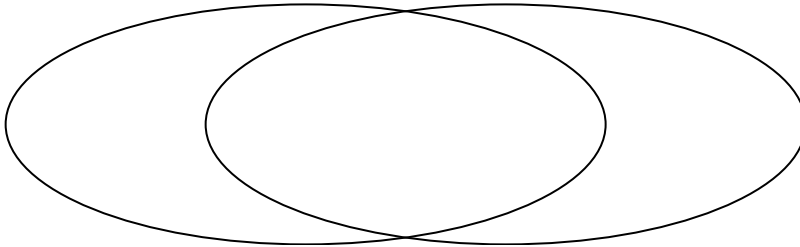
Solve each problem.

1) The table below shows the physical traits of different students. Use the chart to fill in the Venn Diagram.

	Tom	Wendy	Carl	Faye	Emma	Ben
Dominant Hand	Right	Left	Left	Left	Right	Left
Hair Color	Blonde	Blonde	Blonde	Blonde	Blonde	Red

**Left Handed**

**Blonde Hair**

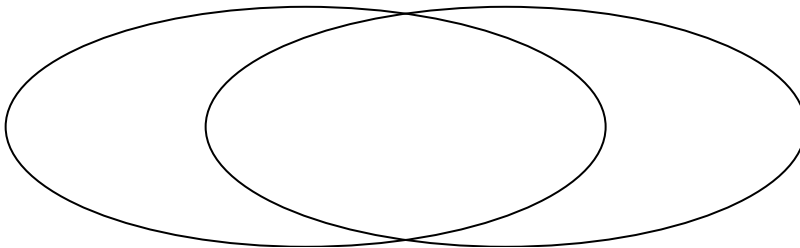


2) The table below shows the description of several video games. Use the chart to fill in the Venn Diagram.

	DreamRush	Everplan	Crystal Rain	Warstar	Airblaze	Farplan
Difficulty	Easy	Hard	Hard	Easy	Easy	Easy
Type	RPG	RPG	RPG	RPG	Action	Action

**Easy**

**RPG**

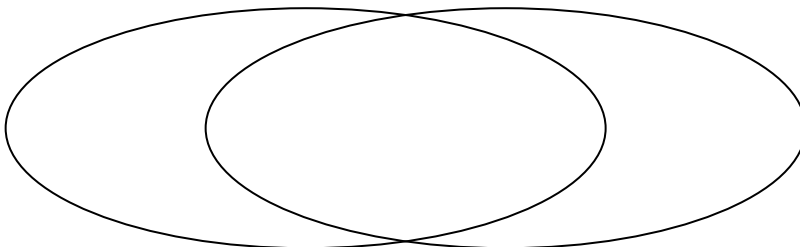


3) The table below shows the attributes of several types of candy. Use the chart to fill in the Venn Diagram.

	Yum-Yums	Ribbles	Fidgies	Banonza	Googlies	Dubbles
Package	Box	Bag	Box	Box	Box	Box
Color	Uniform	Mixed	Mixed	Uniform	Uniform	Mixed

**Box Package**

**Mixed Color**





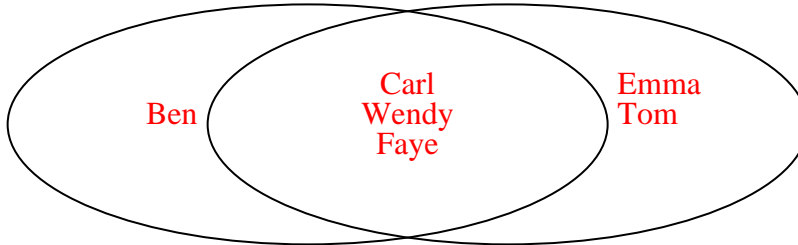
Solve each problem.

1) The table below shows the physical traits of different students. Use the chart to fill in the Venn Diagram.

	Tom	Wendy	Carl	Faye	Emma	Ben
Dominant Hand	Right	Left	Left	Left	Right	Left
Hair Color	Blonde	Blonde	Blonde	Blonde	Blonde	Red

Left Handed

Blonde Hair

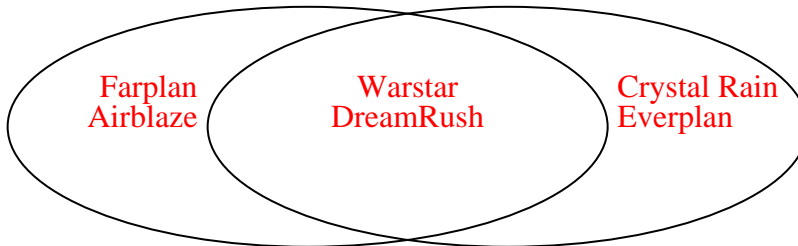


2) The table below shows the description of several video games. Use the chart to fill in the Venn Diagram.

	DreamRush	Everplan	Crystal Rain	Warstar	Airblaze	Farplan
Difficulty	Easy	Hard	Hard	Easy	Easy	Easy
Type	RPG	RPG	RPG	RPG	Action	Action

Easy

RPG

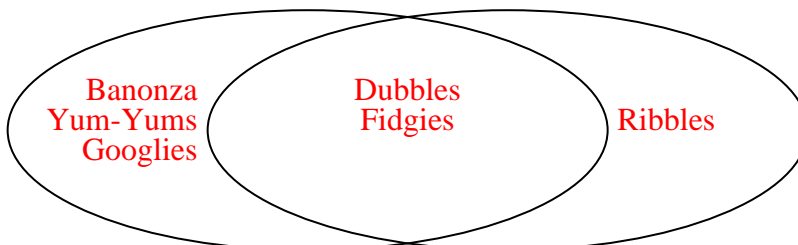


3) The table below shows the attributes of several types of candy. Use the chart to fill in the Venn Diagram.

	Yum-Yums	Ribbles	Fidgies	Banonza	Googlies	Dubbles
Package	Box	Bag	Box	Box	Box	Box
Color	Uniform	Mixed	Mixed	Uniform	Uniform	Mixed

Box Package

Mixed Color





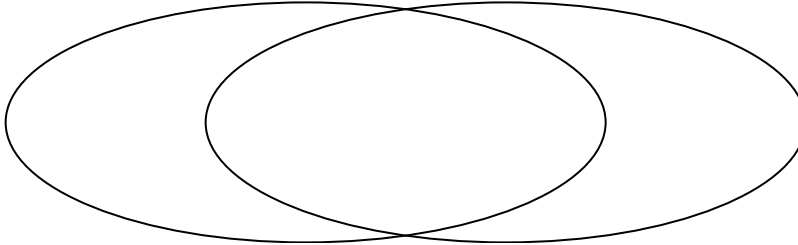
Solve each problem.

1) The table below shows the physical traits of different students. Use the chart to fill in the Venn Diagram.

	Emma	Helen	Jane	Faye	Gary	Mark
Eye Color	Green	Green	Blue	Blue	Blue	Blue
Hair Color	Blonde	Blonde	Red	Blonde	Red	Blonde

**Blue Eyes**

**Blonde Hair**

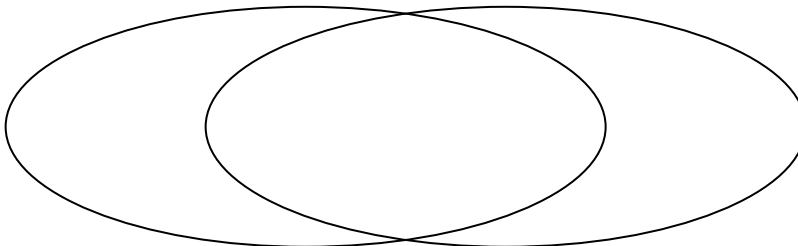


2) The table below shows the description of several video games. Use the chart to fill in the Venn Diagram.

	Everplan	Warstar	Farplan	Crystal Rain	DreamRush	Airblaze
Length	Long	Short	Short	Short	Long	Short
Art Style	Realistic	Realistic	Realistic	Realistic	Realistic	Fantasy

**Short Length**

**Realistic Art**

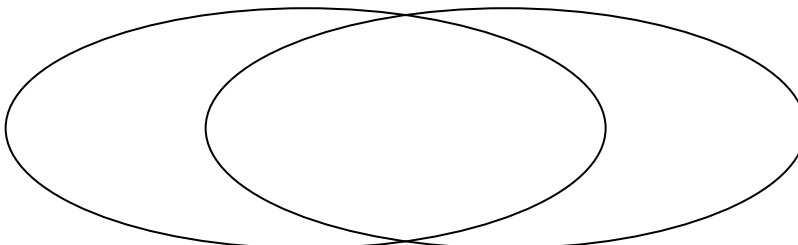


3) The table below shows the attributes of several types of candy. Use the chart to fill in the Venn Diagram.

	Dubbles	Bananza	Googlies	Fidgies	Ribbles	Yum-Yums
Package	Bag	Box	Bag	Box	Box	Box
Flavor	Sugar	Sugar	Sugar	Sugar	Chocolate	Chocolate

**Box Package**

**Sugar**





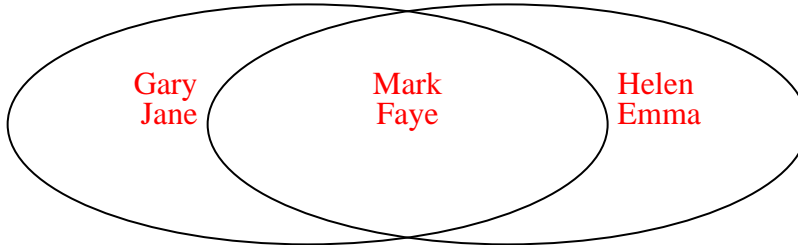
Solve each problem.

1) The table below shows the physical traits of different students. Use the chart to fill in the Venn Diagram.

	Emma	Helen	Jane	Faye	Gary	Mark
Eye Color	Green	Green	Blue	Blue	Blue	Blue
Hair Color	Blonde	Blonde	Red	Blonde	Red	Blonde

**Blue Eyes**

**Blonde Hair**

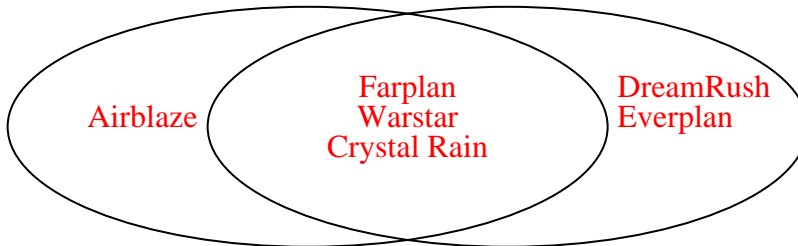


2) The table below shows the description of several video games. Use the chart to fill in the Venn Diagram.

	Everplan	Warstar	Farplan	Crystal Rain	DreamRush	Airblaze
Length	Long	Short	Short	Short	Long	Short
Art Style	Realistic	Realistic	Realistic	Realistic	Realistic	Fantasy

**Short Length**

**Realistic Art**



3) The table below shows the attributes of several types of candy. Use the chart to fill in the Venn Diagram.

	Dubbles	Bananza	Googlies	Fidgies	Ribbles	Yum-Yums
Package	Bag	Box	Bag	Box	Box	Box
Flavor	Sugar	Sugar	Sugar	Sugar	Chocolate	Chocolate

**Box Package**

**Sugar**

