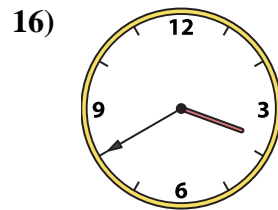
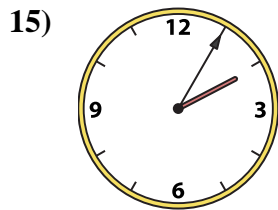
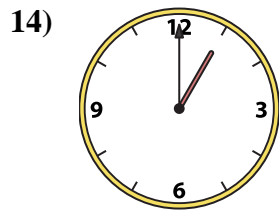
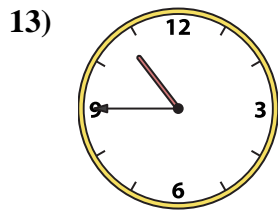

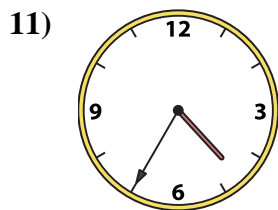
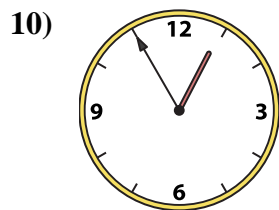
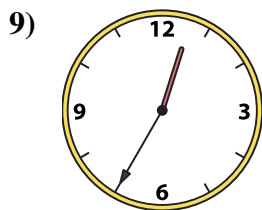
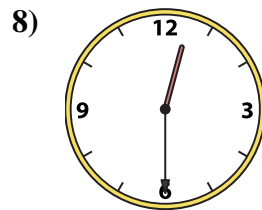
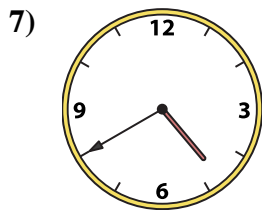
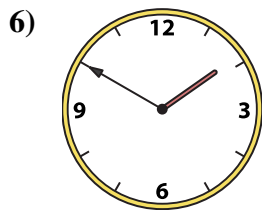
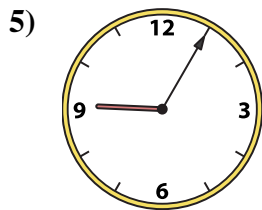
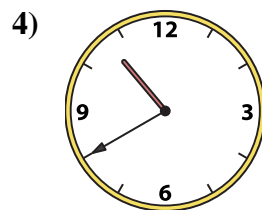
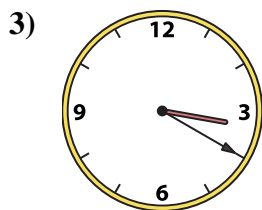
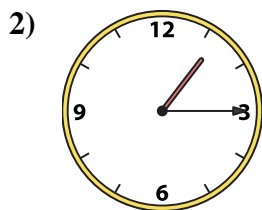
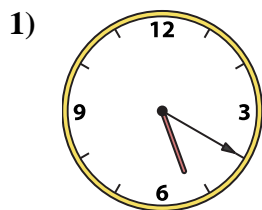




Match the analog clock to the digital clock.



A. 2:05

B. 5:20

C. 1:50

D. 12:55

E. 12:35

F. 12:20

G. 12:30

H. 10:40

I. 1:15

J. 1:00

K. 9:05

L. 10:45

M. 3:40

N. 4:40

O. 3:20

P. 4:35

Answers

1. _____

2. _____

3. _____

4. _____

5. _____

6. _____

7. _____

8. _____

9. _____

10. _____

11. _____

12. _____

13. _____

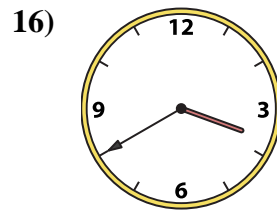
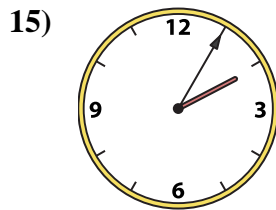
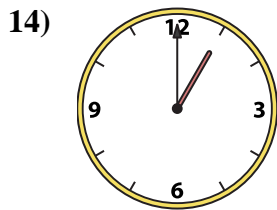
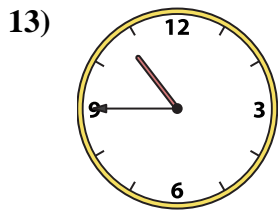
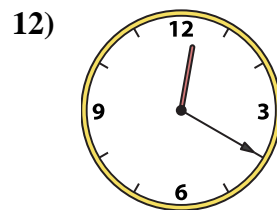
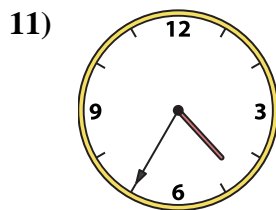
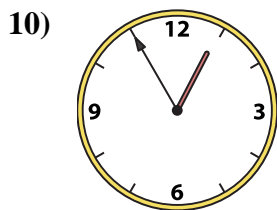
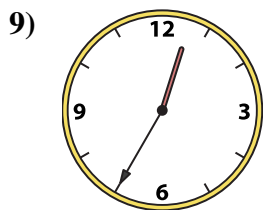
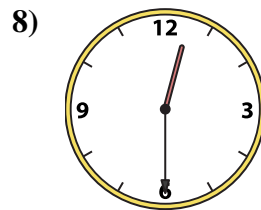
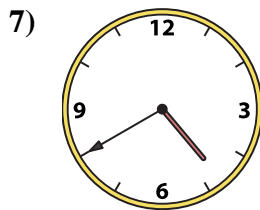
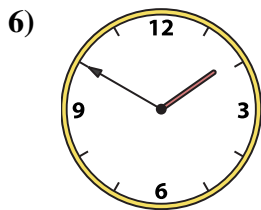
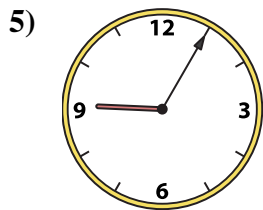
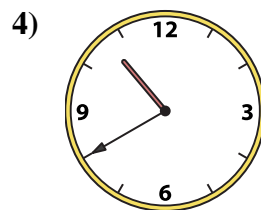
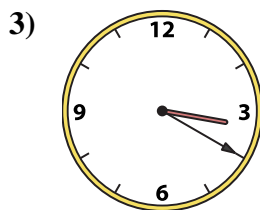
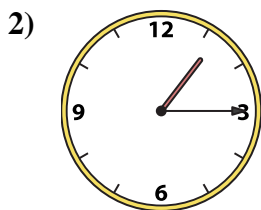
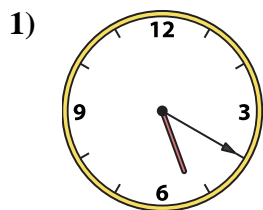
14. _____

15. _____

16. _____



Match the analog clock to the digital clock.



A. 2:05

B. 5:20

C. 1:50

D. 12:55

E. 12:35

F. 12:20

G. 12:30

H. 10:40

I. 1:15

J. 1:00

K. 9:05

L. 10:45

M. 3:40

N. 4:40

O. 3:20

P. 4:35

Answers

1. **B**

2. **I**

3. **O**

4. **H**

5. **K**

6. **C**

7. **N**

8. **G**

9. **E**

10. **D**

11. **P**

12. **F**

13. **L**

14. **J**

15. **A**

16. **M**