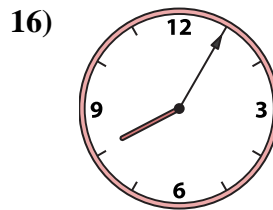
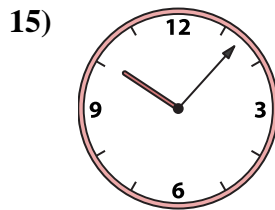
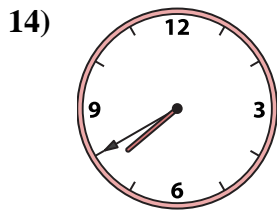
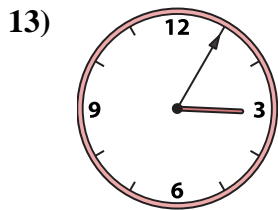
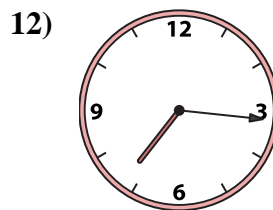
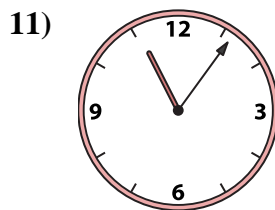
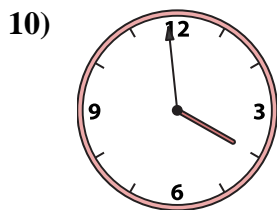

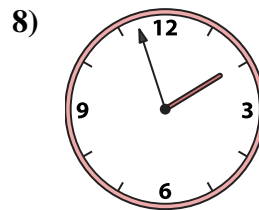
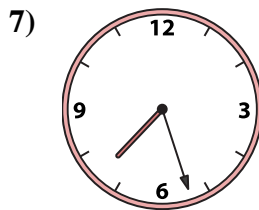
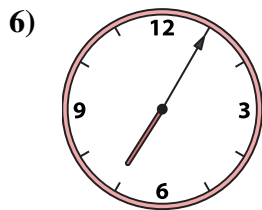
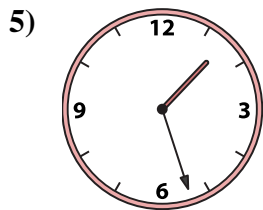
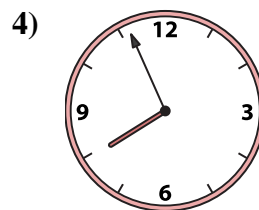
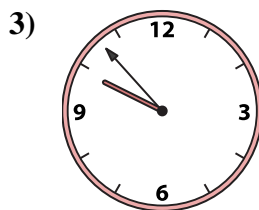
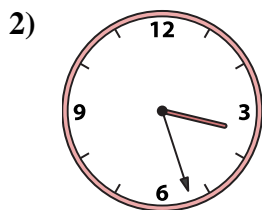
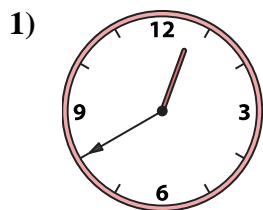




Match the analog clock to the digital clock.



Answers

1. _____

2. _____

3. _____

4. _____

5. _____

6. _____

7. _____

8. _____

9. _____

10. _____

11. _____

12. _____

13. _____

14. _____

15. _____

16. _____

A. **9:53**

B. **1:57**

C. **7:27**

D. **7:40**

E. **7:00**

F. **3:27**

G. **7:56**

H. **3:05**

I. **3:59**

J. **1:27**

K. **11:06**

L. **7:16**

M. **7:05**

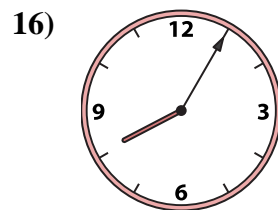
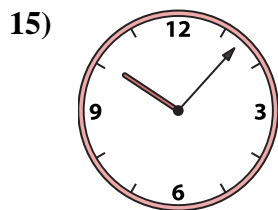
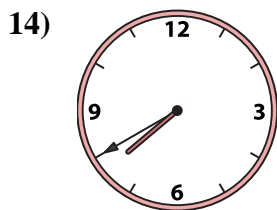
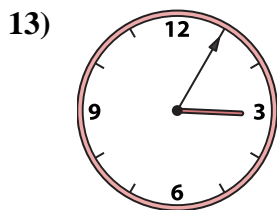
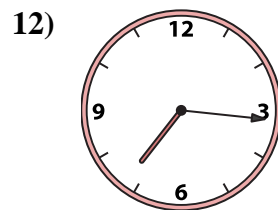
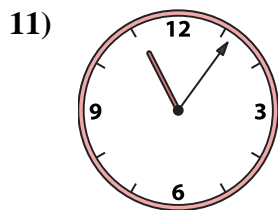
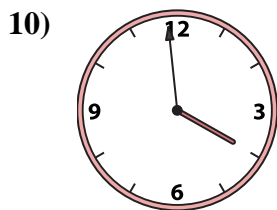


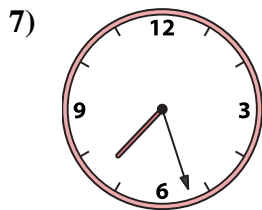
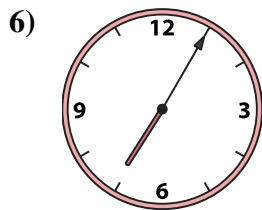
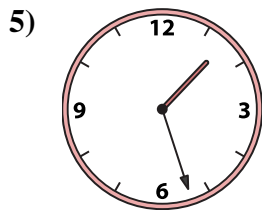
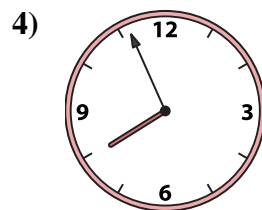
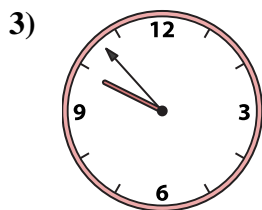
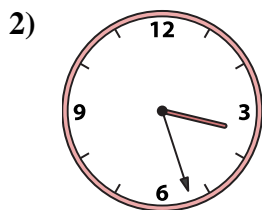
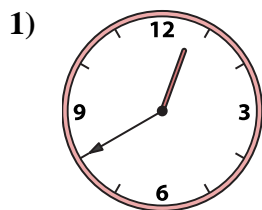
N. **12:40**

O. **8:05**

P. **10:07**



Match the analog clock to the digital clock.



A. **9:53**

B. **1:57**

C. **7:27**

D. **7:40**

E. **7:00**

F. **3:27**

G. **7:56**

H. **3:05**

I. **3:59**

J. **1:27**

K. **11:06**

L. **7:16**

M. **7:05**

N. **12:40**

O. **8:05**

P. **10:07**

Answers

1. **N**

2. **F**

3. **A**

4. **G**

5. **J**

6. **M**

7. **C**

8. **B**

9. **E**

10. **I**

11. **K**

12. **L**

13. **H**

14. **D**

15. **P**

16. **O**