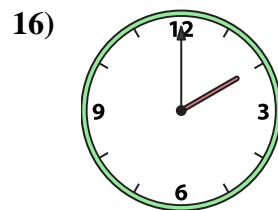
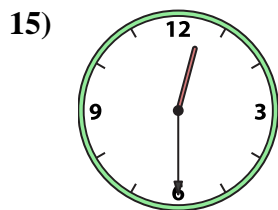
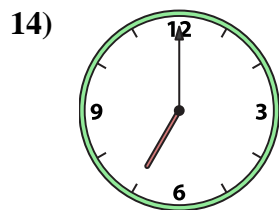
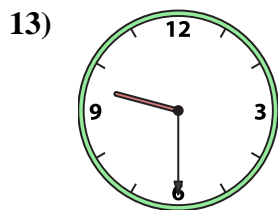
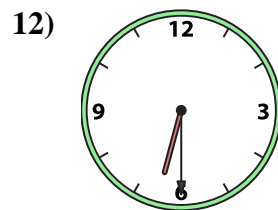
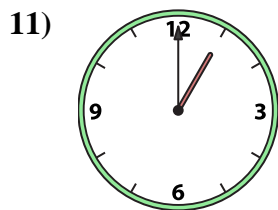
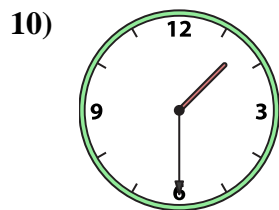
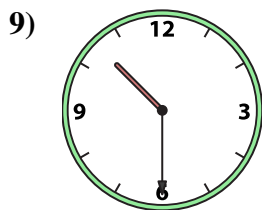
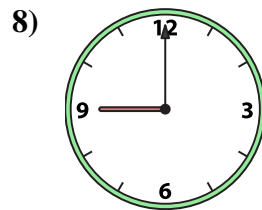
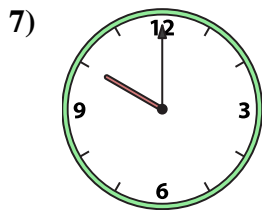
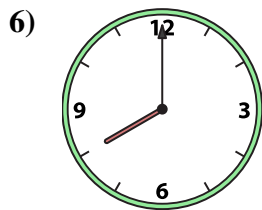
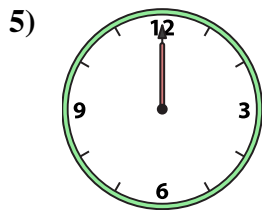
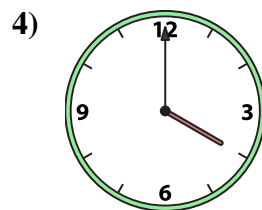
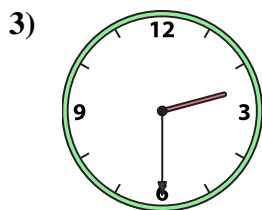
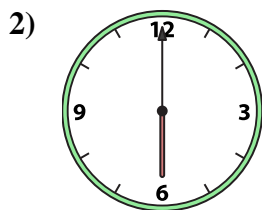
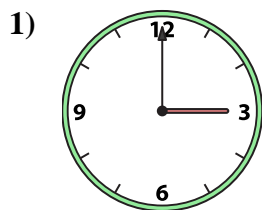




Match the analog clock to the digital clock.



A. 6:00

B. 9:00

C. 10:30

D. 7:00

E. 9:30

F. 12:30

G. 10:00

H. 2:30

I. 2:00

J. 12:00

K. 8:00

L. 1:30

M. 1:00

N. 4:00

O. 3:00

P. 6:30

Answers

1. _____

2. _____

3. _____

4. _____

5. _____

6. _____

7. _____

8. _____

9. _____

10. _____

11. _____

12. _____

13. _____

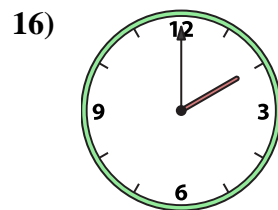
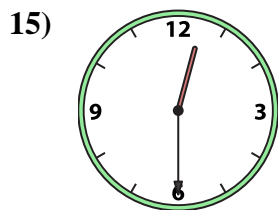
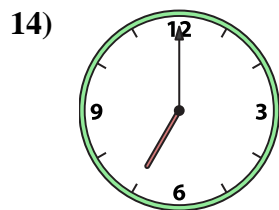
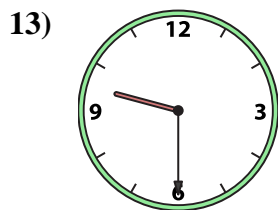
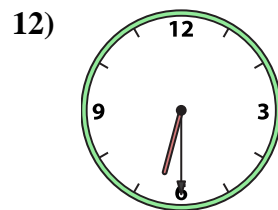
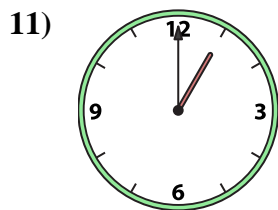
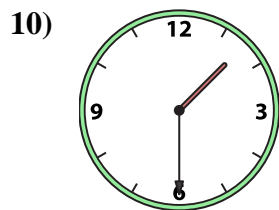
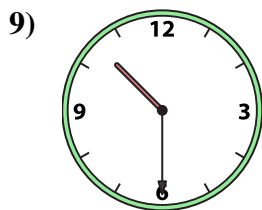
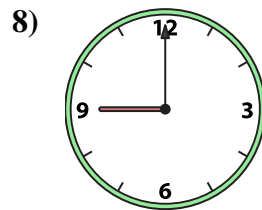
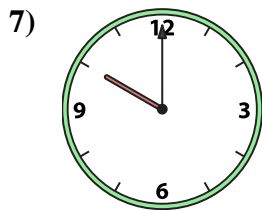
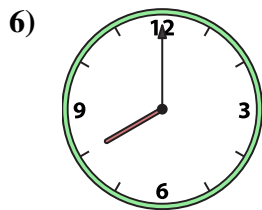
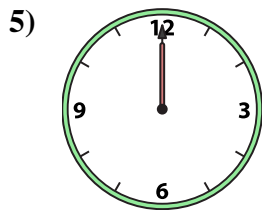
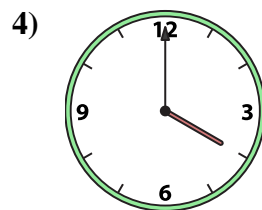
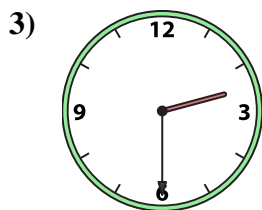
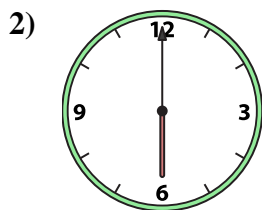
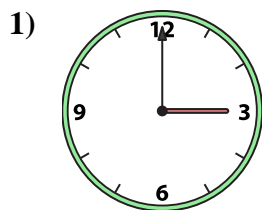
14. _____

15. _____

16. _____



Match the analog clock to the digital clock.



A. **6:00**

B. **9:00**

C. **10:30**

D. **7:00**

E. **9:30**

F. **12:30**

G. **10:00**

H. **2:30**

I. **2:00**

J. **12:00**

K. **8:00**

L. **1:30**

M. **1:00**

N. **4:00**

O. **3:00**

P. **6:30**

Answers

1. **O**

2. **A**

3. **H**

4. **N**

5. **J**

6. **K**

7. **G**

8. **B**

9. **C**

10. **L**

11. **M**

12. **P**

13. **E**

14. **D**

15. **F**

16. **I**